
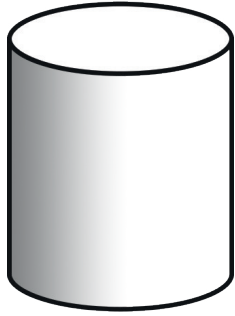


Name the 3D Shape



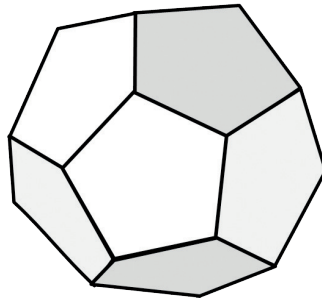
Number of faces _____

Name _____



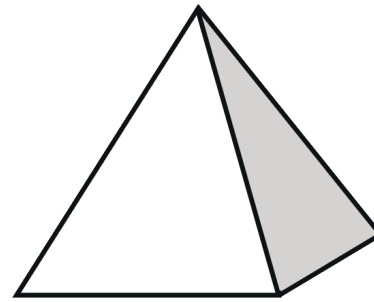
Number of faces _____

Name _____




Number of faces _____

Name _____



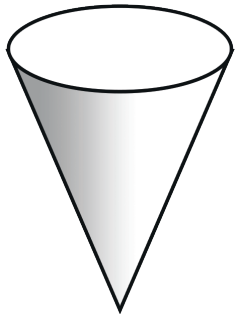
Number of faces _____

Name _____



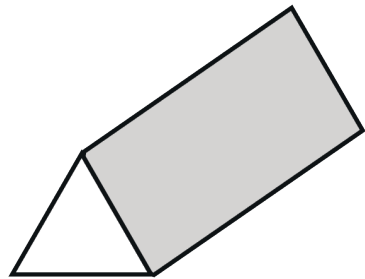
Number of faces _____

Name _____



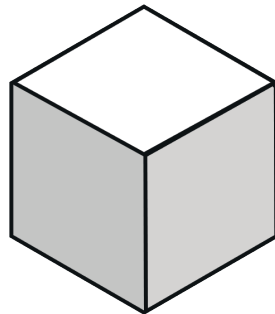
Number of faces _____

Name _____



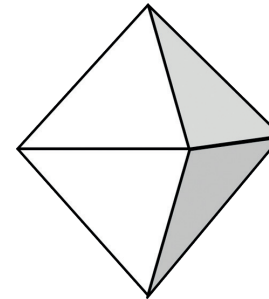
Number of faces _____

Name _____




Number of faces _____

Name _____



Number of faces _____


Name _____



Number of faces _____

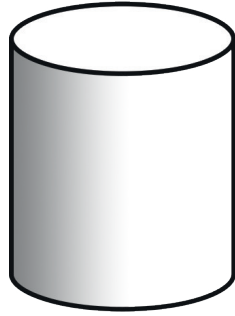
Name _____

Name the 3D Shape **Answers**



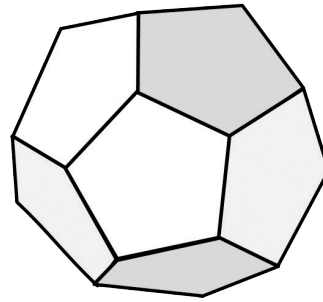
Number of faces **1**

Name **Sphere**



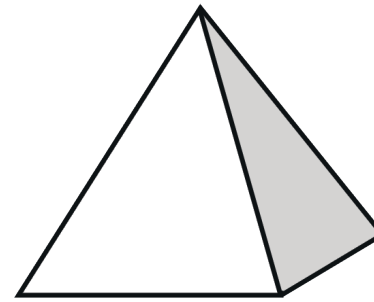
Number of faces **3**

Name **Cylinder**




Number of faces **12**

Name **Dodecahedron**



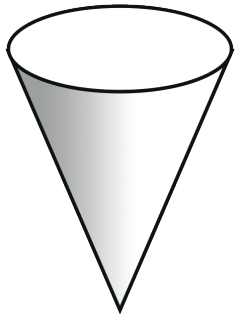
Number of faces **4**

Name **Pyramid**



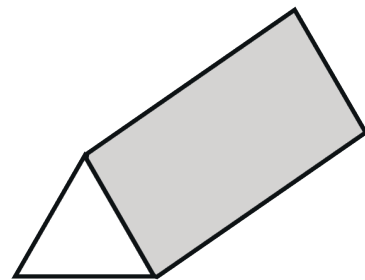
Number of faces **6**

Name **Cuboid**



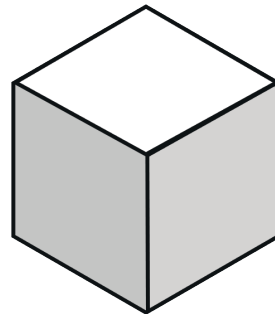
Number of faces **2**

Name **Cone**



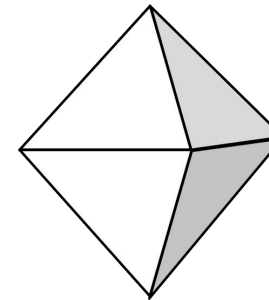
Number of faces **5**

Name **Triangular prism**



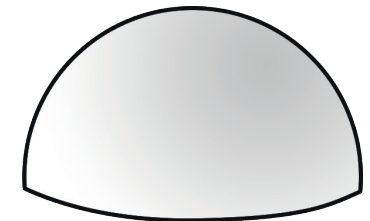
Number of faces **6**

Name **Cube**



Number of faces **8**

Name **Octahedron**



Number of faces **2**

Name **Half Sphere**